

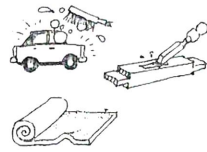
JOBS QUIZ

What do these people do?

Put a in the correct box.

1. Carpenters

- clean cars.
- make things from wood.
- lay carpets.




2. Dockers

- build ships.
- help in hospitals.
- load and unload ships.



3. Tailors

- make clothes.
- look after animals.
- drive large lorries.

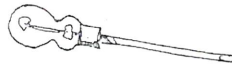


What do they use for their work?

For example:

4. A car mechanic uses a spanner.

- 4. a car mechanic
- 5. an electrician
- 6. an accountant
- 7. a dressmaker
- 8. a gardener
- 9. a decorator



a screwdriver




a brush



a spanner



a calculator



a sewing machine



a spade

Where do these people work?

For example:

10. A chambermaid works in a hotel.

- 10. a chambermaid
- 11. a typist
- 12. a lecturer
- 13. an actor
- 14. a sales assistant
- 15. a machinist



office



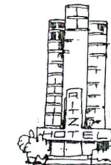
shop



university



theatre



hotel



factory

Who wears what for their work?

For example:

16. A chef.

16.



19.



17.



20.



18.



21.



- a policeman
- a miner
- an air hostess

- a surgeon
- a chef
- a soldier

How many of these people normally work outside in their work?

22. Write the number in this box.

- printer
- postman
- receptionist
- farmer
- traffic warden
- lawyer
- bricklayer
- milkman
- clerk
- optician
- chemist

NATIONALITIES

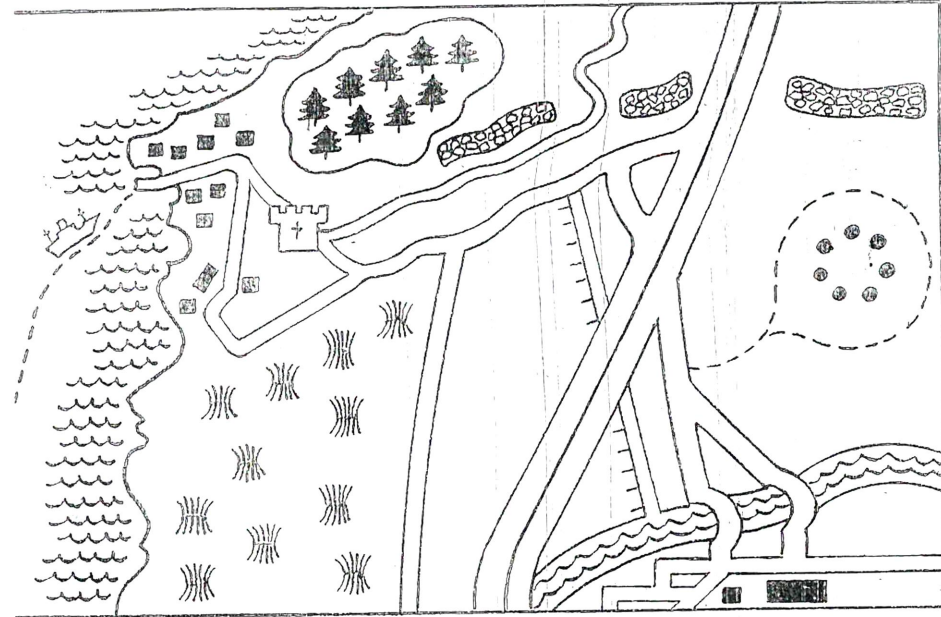
In this word square there are 12 hidden words. They are all different nationalities.

The words are horizontal  vertical  or diagonal . The hats will help you.

S	C	O	T	T	I	S	H	V	S
A	D	F	P	F	R	E	N	C	H
U	M	U	V	O	S	G	T	L	B
S	Z	E	T	M	H	Y	V	U	R
T	W	N	R	C	O	P	P	S	I
R	A	Q	X	I	H	T	Y	C	T
I	H	Y	Z	R	C	I	B	H	I
A	M	E	X	I	C	A	N	I	S
N	E	I	K	E	D	N	N	N	H
I	N	D	I	A	N	B	P	E	M
G	F	A	S	P	A	N	I	S	H
R	U	S	S	I	A	N	O	E	N

Map Reading

Look at the map. What do the symbols represent?
Complete the key.

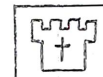


KEY

For example:
canal



5.



9.



2.



6.



10.



3.



7.



11.



4.



8.



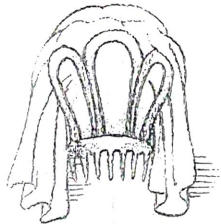
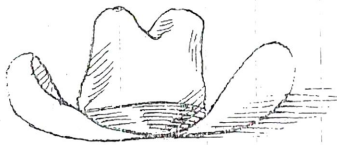
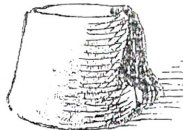
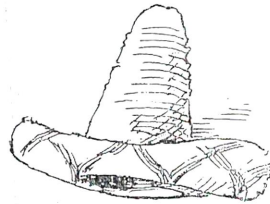
12.



canal farmland motorway footpath coast old wall
ferry stone circle village forest bridge castle




For example:
Chinese



History Quiz

What had just happened when these historic photographs were taken?
For example:




1. The Wright Brothers


1. The Wright Brothers had just made their first flight. 




2. Julius Caesar



3. The Greeks



4. S.S. Titanic



5. Thomas Edison



6. Marco Polo



7. Christopher Columbus

make their first flight

be assassinated

hit an iceberg

discover the electric light bulb

discover the Americas

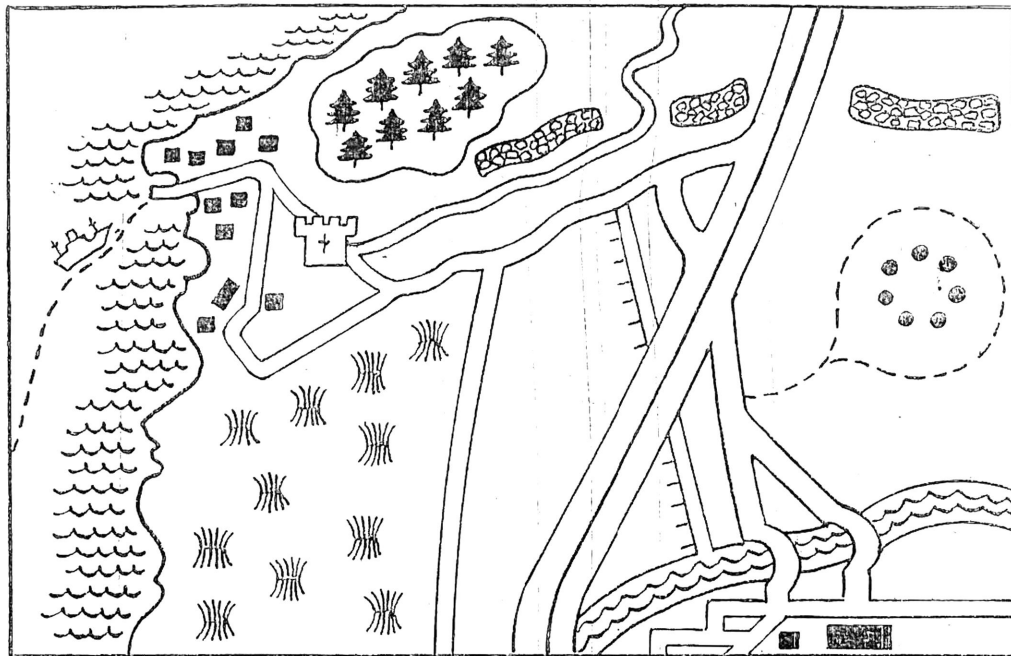
enter Troy

return from China

Map Reading

Look at the map. What do the symbols represent?

Complete the key.

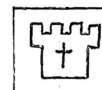


KEY

For example:
1. canal



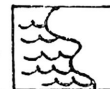
5.




9.



2.



6.



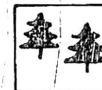
10.



3.



7.




11.



4.



8.



12.



canal farmland motorway footpath coast old wall
ferris stone circle village forest bridge castle

